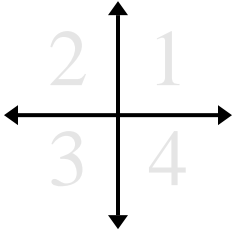




Determine which quadrant each pair of coordinates will be in.



Answers

Ex. 1 2 3 4

Ex) (1 , 18) (-1 , 18) (-1 , -18) (1 , -18)

1. _____

1) (-6 , -12) (-6 , 12) (6 , -12) (6 , 12)

2. _____

2) (2 , -6) (-2 , -6) (2 , 6) (-2 , 6)

3. _____

3) (-6 , -10) (6 , 10) (6 , -10) (-6 , 10)

4. _____

4) (-18 , 9) (18 , -9) (-18 , -9) (18 , 9)

5. _____

5) (-3 , -2) (3 , 2) (-3 , 2) (3 , -2)

6. _____

6) (19 , -19) (-19 , -19) (19 , 19) (-19 , 19)

7. _____

7) (-11 , 3) (-11 , -3) (11 , 3) (11 , -3)

8. _____

8) (10 , 11) (10 , -11) (-10 , 11) (-10 , -11)

9. _____

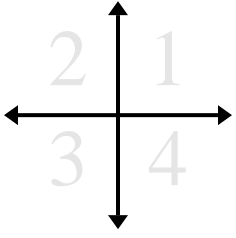
9) (-12 , 16) (12 , -16) (12 , 16) (-12 , -16)

10. _____

10) (-7 , 4) (7 , -4) (7 , 4) (-7 , -4)



Determine which quadrant each pair of coordinates will be in.



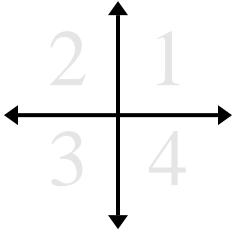
| | | | |
|----------------------|-------------|------------|-------------|
| Ex) (1 , 18) | (-1 , 18) | (-1 , -18) | (1 , -18) |
| 1) (-6 , -12) | (-6 , 12) | (6 , -12) | (6 , 12) |
| 2) (2 , -6) | (-2 , -6) | (2 , 6) | (-2 , 6) |
| 3) (-6 , -10) | (6 , 10) | (6 , -10) | (-6 , 10) |
| 4) (-18 , 9) | (18 , -9) | (-18 , -9) | (18 , 9) |
| 5) (-3 , -2) | (3 , 2) | (-3 , 2) | (3 , -2) |
| 6) (19 , -19) | (-19 , -19) | (19 , 19) | (-19 , 19) |
| 7) (-11 , 3) | (-11 , -3) | (11 , 3) | (11 , -3) |
| 8) (10 , 11) | (10 , -11) | (-10 , 11) | (-10 , -11) |
| 9) (-12 , 16) | (12 , -16) | (12 , 16) | (-12 , -16) |
| 10) (-7 , 4) | (7 , -4) | (7 , 4) | (-7 , -4) |

Answers

| | | | | |
|-----|----------|----------|----------|----------|
| Ex. | <u>1</u> | <u>2</u> | <u>3</u> | <u>4</u> |
| 1. | <u>3</u> | <u>2</u> | <u>4</u> | <u>1</u> |
| 2. | <u>4</u> | <u>3</u> | <u>1</u> | <u>2</u> |
| 3. | <u>3</u> | <u>1</u> | <u>4</u> | <u>2</u> |
| 4. | <u>2</u> | <u>4</u> | <u>3</u> | <u>1</u> |
| 5. | <u>3</u> | <u>1</u> | <u>2</u> | <u>4</u> |
| 6. | <u>4</u> | <u>3</u> | <u>1</u> | <u>2</u> |
| 7. | <u>2</u> | <u>3</u> | <u>1</u> | <u>4</u> |
| 8. | <u>1</u> | <u>4</u> | <u>2</u> | <u>3</u> |
| 9. | <u>2</u> | <u>4</u> | <u>1</u> | <u>3</u> |
| 10. | <u>2</u> | <u>4</u> | <u>1</u> | <u>3</u> |



Determine which quadrant each pair of coordinates will be in.



Ex)

1)

2)

3)

4)

5)

6)

7)

8)

9)

10)

Answers

Ex. 1 2 3 4

1. _____

2. _____

3. _____

4. _____

5. _____

6. _____

7. _____

8. _____

9. _____

10. _____